



# ARKA JAIN University, Jharkhand

2<sup>nd</sup> Semester External Examination – 2017-18

Subject: History of Western Costumes

Time: 3 Hours

Course: BA FD

Full Marks: 50

Pass Marks: 20

- Candidates are required to give their answers in their own words as far as practicable.
- Question Paper is divided into **Three Parts –A, B & C**
- **Part-A** is compulsory
- **Part- B** contains **FIVE** questions out of which **THREE** question are to be answered.
- **Part - C** contains **TWO** questions out of which **ONE** question is to be answered.

## PART A

Q.1) All questions are compulsory:

(10x2=20)

- i) Name the 4 main garment of the Greek civilization.
- ii) What did the Greek travelling costume in corporate?
- iii) What is perizoma? Which civilization doesit belong to?
- iv) What is a shenti?
- v) What were the two version of paenula?
- vi) What are boning corsets?
- vii) Describe a Toga Candida. Who wore it?
- viii) What is pallium?
- ix) What is Kandi?
- x) Describe Konas.

## PART B

Answer any three:

(3x5=15)

- Q.2) Write about the Geek costumes, hair style, and footwear.
- Q.3) Briefly write about one male and one female roman costume.
- Q.4) Explain briefly about Mantua.
- Q.5) Briefly explain each: bliaut, hose, leg band and doublet.
- Q.6) Write about fringes in context to ancient Mesopotamian costumes.



PART C

(1x15=15)

Answer any one:

Q.7) In details explain the costumes worn by the Sumerians and Assyrians.

Q.8) Cosmetics and jewelry were very important aspects of fashion in ancient Egyptian civilization. Explain this in details.

English	Hindi	Maths	Science	Average
80%	75%	78%	72%	





## ARKA JAIN University, Jharkhand

2<sup>nd</sup> Semester Final Examination – 2017-18

Subject: Fashion Illustration

Subject Code:

Time: 3 Hours

Course: BA FD

Full Marks: 50


Pass Marks: 20

- Candidates are required to give their answers in their own words as far as practicable.
- Question Paper is divided into **Three Parts –A, B & C**
- **Part-A** is compulsory
- **Part- B** contains **THREE** questions out of which **TWO** question are to be answered.
- **Part - C** is compulsory

### PART A

Q.1) Create the head/ face angle for the below two:

(5x2=10)






PART B

Create stick figure of any two:

(5x2=10)

Q1.)



Q2.)



Q3.)









Subject: Garment Construction  
Time: 2 Hours

**PART C**  
**(30 marks)**

Course: BA FD  
Full Marks: 50  
Pass Marks: 30

- Q5.)** Observe and study the ball joint figure in front of you and do the following:
- a.) Recreate it in the same posture and body angle
  - b.) Convert the above into stick figure drawing
  - c.) Flesh up the stick figure
  - d.) Stylize it. (You can experiment with proportion, facial details, and in any other ways you that you can use your creativity)









**Q5.)** Observe and study the ball joint figure in front of you and do the following:

- a.) Recreate it in the same posture and body angle
- b.) Convert the above into stick figure drawing
- c.) Flesh up the stick figure
- d.) Stylize it. (You can experiment with proportion, facial details, and in any other ways you that you can use your creativity)



(a)

(b)



(c)

(d)

(e)





# ARKA JAIN University, Jharkhand

2<sup>nd</sup> Semester External Examination – 2017-18

Subject: Garment Construction

Course: BA FD

Full Marks: 50

Pass Marks: 20

Time: 3 Hours

- Candidates are required to give their answers in their own words as far as practicable.
- Question Paper is divided into **Three Parts –A, B & C**
- **Part-A** is compulsory
- **Part- B** contains **THREE** questions out of which **TWO** question are to be answered.
- **Part - C** contains **TWO** questions out of which **ONE** question is to be answered.

## PART A

Q.1) Identify and name each of the below details or seams

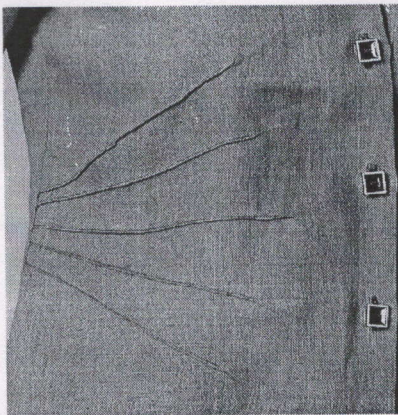
(5x1=5 marks)




(a)




(b)



(c)



(d)



(e)

## PART B



Answer any two: (5x2=10 marks)

Q.2) A Swatch with 3 straight lines at a distance of  $1/4^{\text{th}}$  inch, 2 pin tucks at a distance of  $1/4^{\text{th}}$  inch, and 5 tucks of  $1/2$  inch

Q3.) A square spiral swatch measuring 15 by 15 inch. The distance between each line should be  $1/4^{\text{th}}$  inch.


Q4.) On swatch size measuring 10 by 5 inches create all the below three seams:

- a) French seam
- b) Plain seam
- c) Lapped seam

PART C

Q.5) Create a test fit of any 1 of the 2 below: (15x1=15marks)

- (a) Basic bodice with classic princess style line
- (b) Basic bodice with armhole princess style line







# ARKA JAIN University, Jharkhand

2nd Semester Final Examination – 2017-18

Subject : Pattern Making

Time : 3 Hours

Course: BA-FD

Full Marks : 50

Pass Marks: 20

- Candidates are required to give their answers in their own words as far as practicable.
- Question Paper is divided into **Three Parts –A, B & C**
- **Part-A ,B & C** are compulsory.

## PART A

**Q.1) Explain in your own words, draw diagram if necessary. (5x1=5)**

- What is bowing and skewing? explain in your own words, draw diagram if necessary.
- What is line / ligne?
- What is tuck dart?
- What is a dart and why is it important?
- What is bias? What do you understand by true bias?

## PART B

**Answer any One: By using any of the dart manipulation technique - slash and spread or pivotal transfer, create the patterns for the illustrated designs below. You will have 2 patterns for the design - 1 working pattern and 1 final pattern with seam allowance and dart trueing. (1x10=10)**

**Q.2) Mid-shoulder Dart**



**Q.3) French Dart**





**Q.4) Mid-Armhole Dart**



**PART C**

**Q.5) Create any 1 of the 2 below stylelines.**

**(1x15=15)**

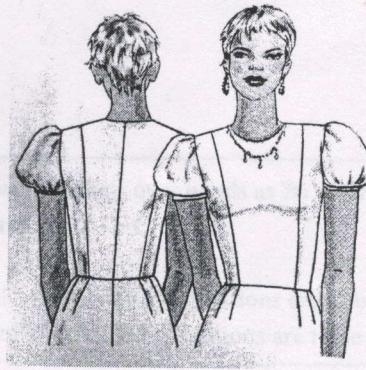
**a) Panel Styleline**



**b) Classic Princess Styleline**



b) Classic Princess Styleline



Q. 6) Create the patterns for any 1 of the following

(1x10=10)

- a) Accordion Pocket
- b) Patch Pockets

Q. 7) Create the patterns for any 1 of the neckline facings -

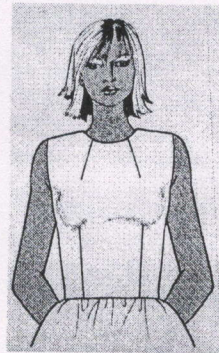
(1x10=10)

- a) Cut - Out armhole
- b) V - cut neckline

OR

Do any 1 of the below double dart manipulation

- a) Mid-neck and Waist Dart



- b) Center Front Neck and Waist Dart







# ARKA JAIN University, Jharkhand

2nd Semester Final Examination – 2017-18

Subject : Hindi

Time : 2 Hours

Course: BA  
Full Marks : 35  
Pass Marks: 14

- Candidates are required to give their answers in their own words as far as practicable.
- Question Paper is divided into **Three Parts –A, B & C**
- **Part-A** is compulsory.
- **Part- B** contains **FOUR** questions out of which **THREE** questions are to be answered.
- **Part- C** contains **THREE** questions out of which **TWO** questions are to be answered.

## PART A

Q.1) All questions are compulsory

A] Multiple Choice Questions :

(4x1=4)

a) कैलाश को क्या हो गया था?

i) बीमारी

ii) सर्प डंसा था

iii) बुखार

b) डॉक्टर चड्ढा को कितनी संताने हैं ?

i) दो

ii) तीन

iii) चार

c) 'अपवित्र' समास है ?

i) नञ समास

ii) अव्ययीभाव समास

d) यथाशक्ति समास है?

i) नञसमास

ii) अव्ययीभाव समास

B] Very Short question

(2x2=4)

a) अर्थ स्पष्ट करें:-

i) ऐसी बानी बोलिये, मन का आपा खोय !

औरन को शीतल करै , आपौ शीतल होय ।

b) निम्नलिखित शब्दों के दो- दो पर्यायवाची शब्द लिखें !

i) उन्नति

ii) किरण



**PART B**

**Q2. Answer any three :**

**(3x5=15)**

a) अर्थ स्पष्ट करें:-

रानी गई सिधार चिता अब उसकी दिव्य सवारी थी,  
मिला तेज से तेज, तेज की वह सच्ची अधिकारी थी,  
अभी उम् कुल तेइस की थी ,मनुज नहीं अवतारी थी ,  
हमको जीवित करने आयी बन स्वतंत्रता-नारी थी ,  
दिखा गई पथ, सिखा गई हमको जो सीख सिखानी थी ,  
बुंदेले हरबोलों के मुँह हमने सुनी कहानी थी ,  
खूब लड़ी मर्दानी वह तो झाँसी वाली रानी थी !

b) वचन की परिभाषा देते हुए उनके भेदों को उदाहरण सहित लिखें?

c) विपरीत शब्द लिखें:-

निरक्षर पुरस्कार, बंधन ,निंदा ,निश्चित ,

d) शिक्षण -शुल्क माफ कराने हेतु प्रधानाचार्य के पास आवेदन पत्र लिखिए ।

**PART C**

**Answer any two:**

**(6x2=12)**

**Q.3) निबन्ध लिखें:-**

नोटबंदी अथवा बिज्ञान वरदान या अभिशाप

**Q.4) निम्नलिखित शब्दावली का हिन्दी में अनुवाद करें:-**

REFUND, TRANSFER, FINANCE, OUTPUT, ACT, CODE

**Q.5) धर्मदास का चरित्र -चित्रण करें-**





# ARKA JAIN University, Jharkhand

2<sup>nd</sup> Semester Final Examination – 2017-18

FD

Subject: Computer Application

Time: 2 Hours

Course: BA

Full Marks : 35

Pass Marks: 14

- Candidates are required to give their answers in their own words as far as practicable.
- Question Paper is divided into **Three Parts –A, B & C**
- **Part-A & B** are compulsory.
- **Part- C** contains **TWO** questions out of which **One** questions are to be answered.

## PART A

Q.1) All questions are compulsory

(3x2=6)

- a. Write the steps to add header and footer in microsoft word document.
- b. Mention the uses of microsoft word.
- c. Mentions any 2 fonts used in microsoft office.

## PART B

Q.2) Write the below phrase in word

(5)

“A quick brown fox jumps over a lazy dog” - Use font color as blue, use appropriate text formatting to write in bold and underline the phrase.

Q.3) Create 2 slides (cover and thank you) with the following content and use appropriate animation to display the content. Save as powerpoint and write your steps of working. (10)

Slide 1 : Title - Annual Weather Report

Subtitle - East India Region

Presented by - Meteorological Department of India

Slide 2 : Thank you



**PART C**

Answer any one:

(14)

Q.4) Create the worksheet with the below information and use the formula (Total distance travelled / Total time taken) to find the Average speed for each cyclist. Write your steps of working

	Total Distance	Total Time	Average speed(Total distance travelled / Total time taken)
Cyclist 1	250	8	
Cyclist 2	225	7.3	
Cyclist 3	190	8.35	
Cyclist 4	184	9	
Cyclist 5	165	7.5	

Q.5) Use excel to create the below table and compute the total marks, average marks, maximum and minimum marks scored. Write your steps of working. Format the percentage cells appropriately. Use header and footer for the sheet.

Name of the student - Priyanka				
Marks on different subjects				
English	Hindi	Maths	Science	Total Marks
70%	56%	78%	87%	
			Average	
			Maximum	
			Minimum	